


If the track were stretch out so that it were entirely in a single plane, the profile would look like the diagram below.



Some of the numbered sections of the track are described to the right. The times are approximate but should be fairly consistent with the graphs on the next page.

About the graphs

The graphs on the following page were produced by attaching a barometric pressure sensor and an electronic "accelerometer" to a portable electronic data collection device. The device collected data at a rate of 20 samples per second. These readings were plotted against time to yield the graphs.

Normal Force/mass vs. Time Graph

When oriented vertically, "accelerometers" do not actually measure acceleration. They measure the Normal Force to Mass ratio rather than the Net Force to Mass ratio. Since gravity always acts downward on the object, the Normal Force will

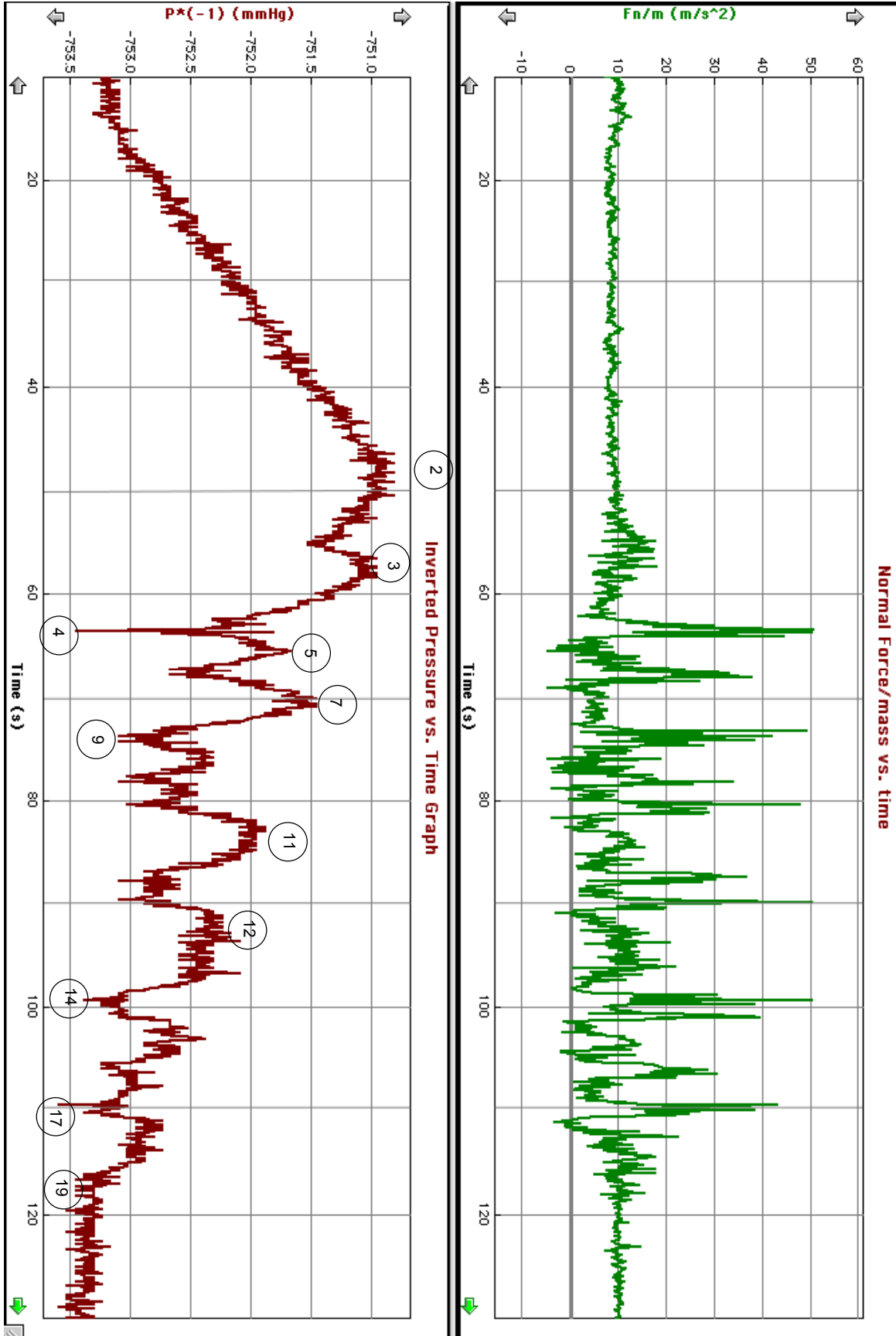
never be the **net** force in a vertical situation. Consequently, you will have to make appropriate adjustments to the graph readings in order to determine accelerations. This discrepancy between "accelerometer" readings and actual acceleration is explained in detail in the acceleration portion of the **Suggestions for Making Measurements** manual.

Inverted Pressure vs. Time Graph

Since the pressure in a fluid in a gravitational field changes with height, the atmospheric pressure as measured by a barometer can be used to gauge vertical position. In the inverted pressure vs. time graph on the following page, the opposite (-) value of the atmospheric pressure was plotted against time. Since atmospheric pressure gets smaller as the height increases, the inverted pressure graph resembles the profile of the ride. This can be very helpful as you attempt to interpret the normal force/mass vs. time graph.


Point	Description	Time (s)
1	Lift	
2	Top of lift	48
3	First hill	58
4	Bottom of first hill	63
5	First bump	65
7		70
9		73
11	Corner	83
12	180° turn	92
14		99
17	Valley	110
19	Brake shed	118

Screamin' Eagle



QUALITATIVE QUESTIONS

If the track were stretch out so that it were entirely in a single plane, the profile would look like the diagram below.



Some of the numbered sections of the track are described to the right. The times correspond to a graph found on the first page.

Point	Description	Time (s)
1	Lift	0
2	Top of lift	48
3	First hill	58
4	Bottom of first hill	63
5	First bump	65
7		70
9		73
11	Corner	83
12	180° turn	92
14		99
17	Valley	110
19	Brake shed	118

- List the number or numbers from the track profile that best match the phrases below:

- _____ maximum velocity
- _____ maximum kinetic energy
- _____ maximum gravitational potential energy
- _____ freefall area
- _____ 3 weightless zones (there are more than 3)
- _____ where a machine makes the ride go instead of gravity
- _____ where friction has greatest effect

- Why is point 2 higher than point 7? Use the term “energy” in your answer.


- Identify at least three reasons that energy becomes stored as internal energy in the system consisting of the roller coaster, the earth and the surrounding air, from point 1 to point 19, in this ride.

- a. _____ b. _____
- c. _____

Screamin' Eagle

QUALITATIVE QUESTIONS (continued)

4. Look at the wheels on the cars and notice that some are above the track and some are below the track. At some times during the ride, the bottom seems to drop out from you. Write the number corresponding to one of those times here _____. Make a sketch of the wheels and explain which wheels were pressing against the rails at this time.



5. List two points where you feel heavy. _____

List two points where you feel light. _____

Note: The questions that follow refer to a normal force/mass vs. time graph. This graph can be found on page 2 of this packet. An explanation of this graph is on page 1.

6. Describe and give reasons for the shape of the pressure and normal force/mass graphs when:
- The rollercoaster is in a valley.
 - The rollercoaster passes over a hilltop.
7. As you go down the first large hill you are obviously speeding up. Should the accelerometer reading during this section account for this acceleration? Explain!

